

WALT: Add



Context: Finding totals

Q: What have we learned about with money so far?

Q: Why do you now think we need to learn about adding?

WALT: Add

Context: Finding totals of money



Do I have enough
money in my purse
to buy both?

I do


We do

Look at the items the children bought.
How much did each child spend?

Child	Item	Price
Child 1	Red hat	£6
	Black sweater	£22
Child 2	Slice of pizza	55p
	Cup of fries	23p

Q: What can I draw to help ?

You do



22p








9p

WALT: Add

Context: Finding totals of money

Look at the Victorian toy shop below.

Victorian toy shop		
peg doll  45p	marbles  17p	hoop  22p
chalk  4p	rocking horse  47p	diabolo  52p



Can you find the total of:

1. The peg doll and the hoop
2. The diabolo and the chalk
3. The rocking horse and the hoop
4. The marbles and the chalk
5. The rocking horse and the peg doll

Varied fluency

Find the total of the bar models.




adding 2 digits and on



Complete the table.

Pounds	Pence	Total
£7	30p	
	40p	£9 and 40p
£15		£15 and 25p

Complete the bar models.



Complete the table.

Pounds	Pence	Total
£4	25p	£___ and ___p
£2		£2 and 40p
	65p	£20 and 65 pence
		£15 and 20p
	55 pence	

Annie wants to buy some new toys.

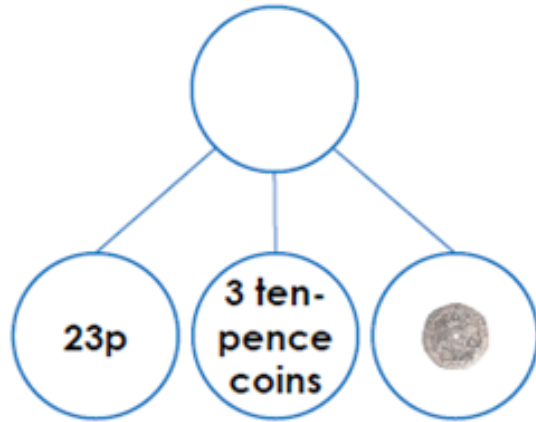


- a) How much does it cost to buy the teddy and the yoyo?
- b) How much does it cost to buy the toy train and the football?
- c) How much does it cost to buy one of everything?
- d) Annie has £9

Circle three items she could buy.



12a. Complete the part-whole model.



VF