

Can you still

On your whiteboards can you draw
2 different ways of making 6p?

WALT: Compare money

< > =

What do these symbols mean?

WALT: Compare money

< less than

> more than

= equal to

I do

Can you compare the amounts of money?



I do

Can you compare the amounts of money?



We do

Can you compare the amounts of money?



You do

Can you compare the amounts of money?



Back to back - face to face

Who has the most? Who has the least? How do you know?



Dora

I have £64





Teddy


I have 64 p


Which is the greatest amount of money in each pair?

Tick your answer.

a) 

b) 


c) 

d) 

Write $<$, $>$ or $=$ to compare the amounts.



Draw money to make the statement correct.



Reasoning

Annie has three coins in her hand.

Jack says,



I have more than you
because I have a 50
pence coin.

Is he correct?

Explain why.