
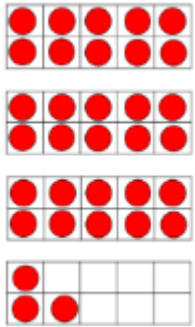


WALT: partition numbers



There are ___ tens and ___ ones.
___ tens + ___ ones = ___



There are ___ tens and ___ ones.
___ tens + ___ ones = ___

Use tens frames and counters to make:

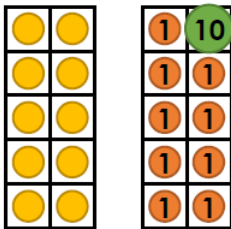
45 = tens and ones

36 = tens and ones

25 = tens and ones

20 = tens and ones

8a. Rey has made the number below.



She says,



My number is 20.

What has Rey done wrong?

