
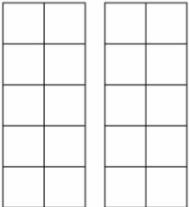
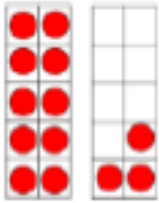
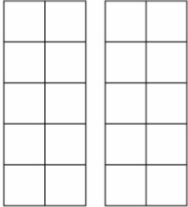
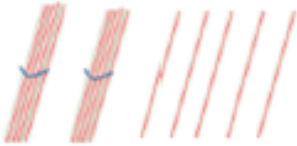
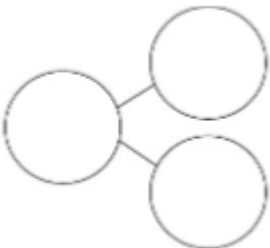
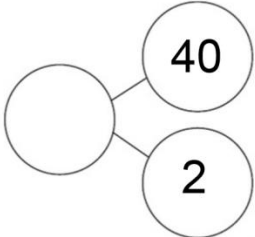
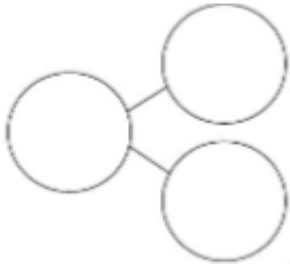



Draw one less		Draw one more												
														
														
														
		<h1>34</h1>												
<table border="1" style="width: 100%; text-align: center;"> <thead> <tr style="background-color: #FFD700;"> <th>Tens</th> <th>Ones</th> </tr> </thead> <tbody> <tr> <td style="height: 30px;"></td> <td style="height: 30px;"></td> </tr> </tbody> </table>	Tens	Ones			<table border="1" style="width: 100%; text-align: center;"> <thead> <tr style="background-color: #FFD700;"> <th>Tens</th> <th>Ones</th> </tr> </thead> <tbody> <tr> <td>5</td> <td>4</td> </tr> </tbody> </table>	Tens	Ones	5	4	<table border="1" style="width: 100%; text-align: center;"> <thead> <tr style="background-color: #FFD700;"> <th>Tens</th> <th>Ones</th> </tr> </thead> <tbody> <tr> <td style="height: 30px;"></td> <td style="height: 30px;"></td> </tr> </tbody> </table>	Tens	Ones		
Tens	Ones													
Tens	Ones													
5	4													
Tens	Ones													
														

11a. Circle forty one. What is three less?

37	38	39	40	41	42	43
----	----	----	----	----	----	----

Circle forty five. What is two more?

42	43	44	45	46	47	48
----	----	----	----	----	----	----


VF