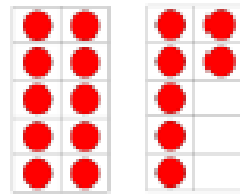


15



17


13

17

How many books can go in the empty box?

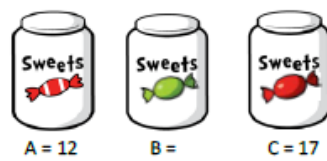


Least




Most

Sarah has three jars of sweets.



She says:



How many sweets could be in B?

&gt;

Complete the statements.

$14 \square 9$

&gt;

$19 \square 20$

=

$13 \square \underline{\quad}$

Fill the gaps:

is more than 15 but less than 20

is less than eighteen but more  
than twelve.

What numbers could go in the boxes?

Explain your answer.

*Order the crayons smallest to greatest*



Make numbers using base ten that could go in each box



smallest



largest



13

18

15



Greatest



Smallest


Who won the competition to score the most hoops?

Kay: 9  
Ben: 16  
Tim: 13


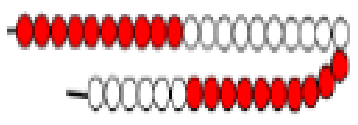
1<sup>st</sup> :  
2<sup>nd</sup> :  
3<sup>rd</sup> :



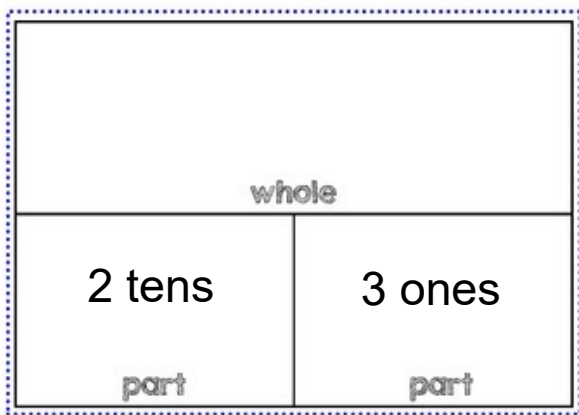
How many?



How many?


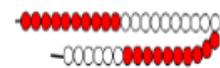




How many?

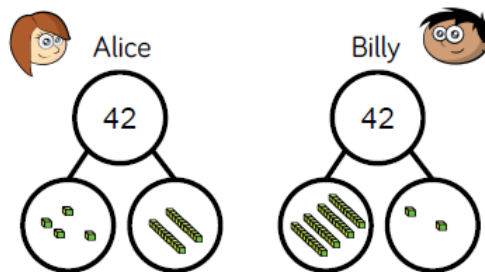


Match the image to the correct number.










- Three tens and six ones
- Two tens and five ones
- Four tens and three ones
- Two tens and nine ones



Alice and Billy both attempt to build the same number.

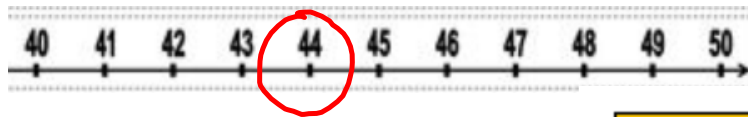


Who is correct?

<p>Base 10</p> 	<p>Ten frame</p> 				
<p>25</p>					
<p>Straws</p> 	<p>Place Value Grid</p> <table border="1" data-bbox="991 936 1193 1010"><thead><tr><th>Tens</th><th>Ones</th></tr></thead><tbody><tr><td></td><td></td></tr></tbody></table>	Tens	Ones		
Tens	Ones				
					



## Lesson 3



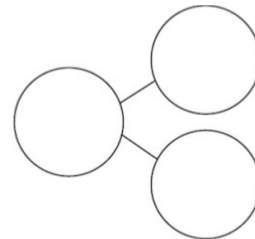
Tens	Ones

What is one more than 44?

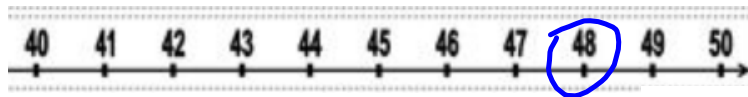
How many tens in 44?

How many ones?

Which number changes?



## Lesson 3



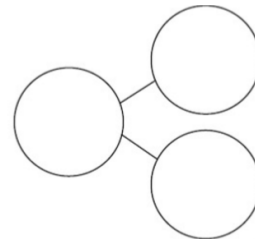
Tens	Ones

What is one more than 48?

How many tens in 48?

How many ones?

Which number changes?



Lesson 3

19	20	21	23	24	25	26	27	28	29
----	----	----	----	----	----	----	----	----	----

One more than 21 is 23

Do you agree?

Explain your answer.

## Lesson 3

Choose the correct numbers to make the sentences correct.

28 26 33 45  
36 43 35 49

is one less than 27

34 is one less than

is one more than 44

50 is one more than

Lesson 3 activity

Lesson 3 WALT: count one more and one less

Draw one less		Draw one more												
		34												
<table border="1"> <tr><th>Tens</th><th>Ones</th></tr> <tr><td></td><td></td></tr> </table>	Tens	Ones			<table border="1"> <tr><th>Tens</th><th>Ones</th></tr> <tr><td>5</td><td>4</td></tr> </table>	Tens	Ones	5	4	<table border="1"> <tr><th>Tens</th><th>Ones</th></tr> <tr><td></td><td></td></tr> </table>	Tens	Ones		
Tens	Ones													
Tens	Ones													
5	4													
Tens	Ones													

11a. Circle forty one. What is three less?

37	38	39	40	41	42	43
----	----	----	----	----	----	----

Circle forty five. What is two more?

42	43	44	45	46	47	48
----	----	----	----	----	----	----

